

TAREAS DE SEGUIMIENTO. 5 DE JUNIO.

MATEMÁTICAS

Problema. Indico los pasos.

Para tapizar un sofá, se necesitan 4,5 metros de tela y para tapizar un tresillo, 8,75 metros. ¿Cuántos metros necesita Antonio para tapizar dos sofás y un tresillo?

LENGUA

- 1) Escribe una oración en voz activa y otra en voz pasiva.


CIENCIAS SOCIALES

- 1) Realizo un dibujo sobre la Edad Media, lo coloreo e indico qué es.

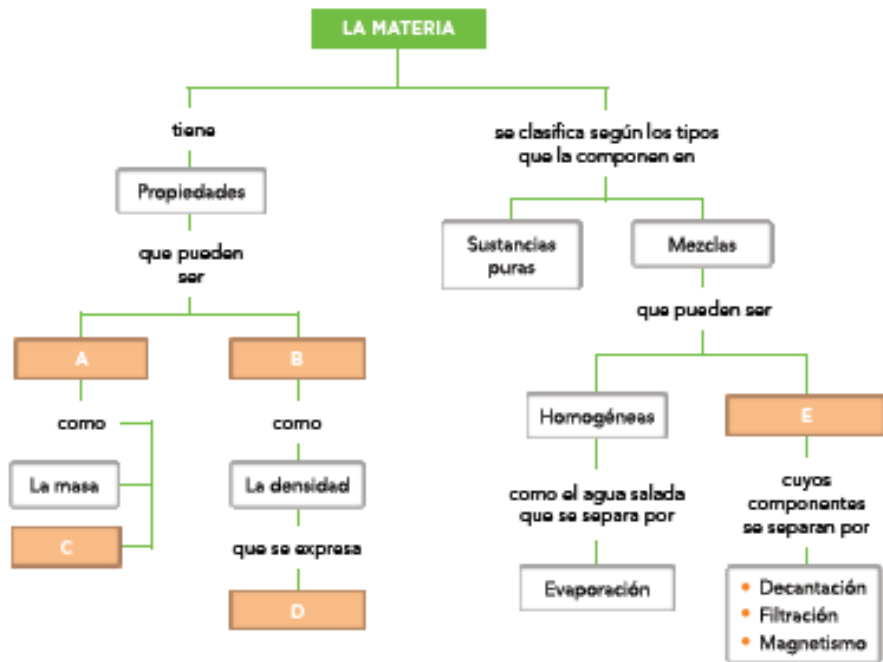
CIENCIAS NATURALES

9 La densidad es una propiedad específica de la materia que permite diferenciar unos tipos de materia de otros. Una experiencia sencilla que te permite comprobarlo es

calcular la densidad de dos líquidos que tengan el mismo volumen. Observa la imagen y realiza los cálculos de la densidad. ¿Qué obtienes?



Copia y completa el esquema:




1 Look and write the words in two groups.

bus bike house lake motorbike mountain plane river town train

There's a ...


lake

There isn't a ...



2 Choose ✓ the correct sentence.


- 1 There's a motorbike on this postcard.
There are some motorbikes on this postcard.
There aren't any motorbikes on this postcard.




- 2 There's a house on this postcard.
There are some houses on this postcard.
There aren't any houses on this postcard.



- 3 There's a tree on this postcard.
There are some trees on this postcard.
There aren't any trees on this postcard.



- 4 There's a boat on this postcard.
There are some boats on this postcard.
There aren't any boats on this postcard.



3 Look and complete.

- 1 There aren't any badges.
2 There _____ some figures.
3 There _____ some magnets.
4 There _____ any keyrings.
5 There _____ any postcards.
6 There _____ any posters.

